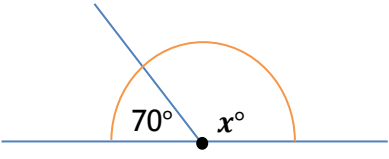
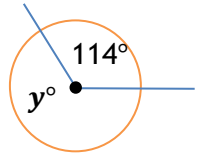
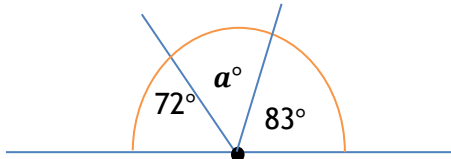
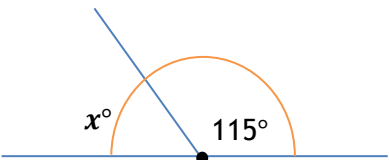
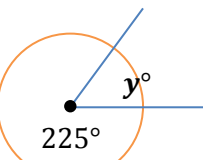
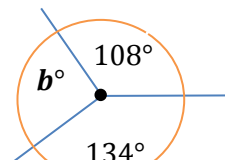
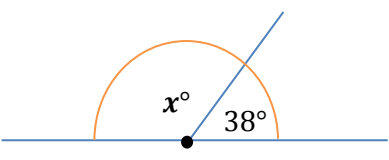
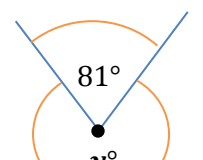
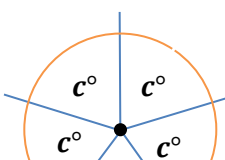
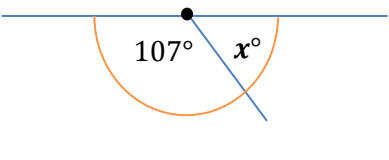
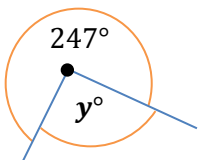
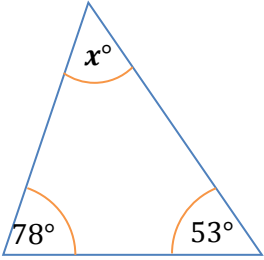
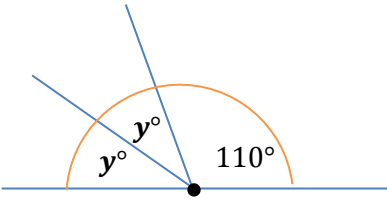
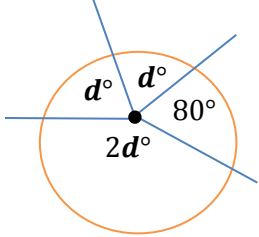
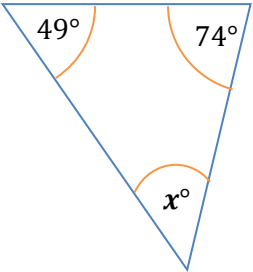
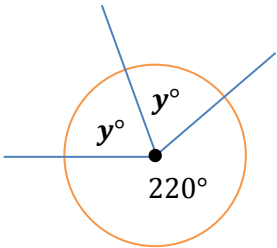
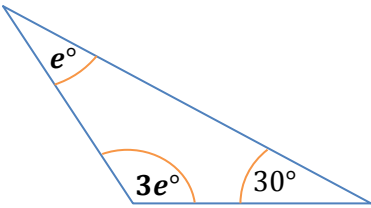
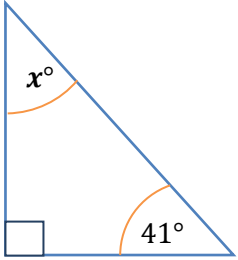
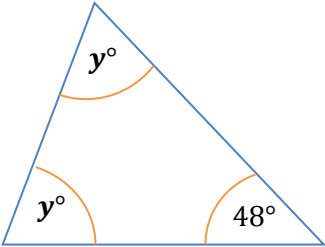
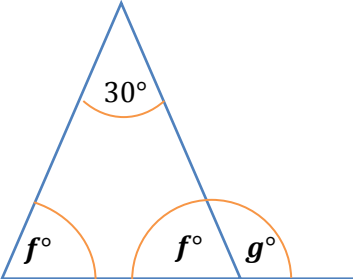


One-point questions (1)	One-point questions (2)	Two-point questions (1)
Find the size of the angle marked x° .	Find the size of the angle marked y° .	Find the size of the marked angle.
<p>1.</p> 	<p>1.</p> 	<p>1.</p> 
<p>2.</p> 	<p>2.</p> 	<p>2.</p> 
<p>3.</p> 	<p>3.</p> 	<p>3.</p> 
<p>4.</p> 	<p>4.</p> 	

Two-point questions (2)	Three-point questions	Four-point questions
Find the size of the angle marked x° .	Find the size of the angle marked y° .	Find the size of each marked letter.
<p>1.</p> 	<p>1.</p> 	<p>1.</p> 
<p>2.</p> 	<p>2.</p> 	<p>2.</p> 
<p>3.</p> 	<p>3.</p> 	<p>3.</p> 

Answers:**One-point questions [4 + 4]**

1. 110°	2. 65°	3. 142°	4. 73°	1. 246°	2. 135°	3. 279°	4. 113°
------------------	-----------------	------------------	-----------------	------------------	------------------	------------------	------------------

Two-point questions [6 + 6]

1. 25°	2. 118°	3. 72°	1. 49°	2. 57°	3. 49°
-----------------	------------------	-----------------	-----------------	-----------------	-----------------

Three-point questions [9]

1. $y = 35^{\circ}$	2. $y = 70^{\circ}$	3. $y = 66^{\circ}$
---------------------	---------------------	---------------------

Four-point questions [12]

1. $d = 70^{\circ}$	2. $e = 37.5^{\circ}$	3. $f = 75^{\circ}$ $g = 105^{\circ}$
---------------------	-----------------------	---------------------------------------

Total points = 41**Additional guidance:**

Two-point questions: assign 1 mark for sight of

1. 155°	2. 242°	3. $5c = 360$	1. 131°	2. 123°	3. 131°
------------------	------------------	---------------	------------------	------------------	------------------

Three-point questions - assign 1 mark for:

1. $2a = 70$	2. $2b = 140$	3. $2c = 132$
--------------	---------------	---------------

Four-point questions: assign points as follows:

- 1 mark for each of 4d and 280. 2 marks for answer.
- 1 mark for each of 4e and 150. 2 marks for answer.
- 1 mark for each of 2f and 150, 1 for each answer.