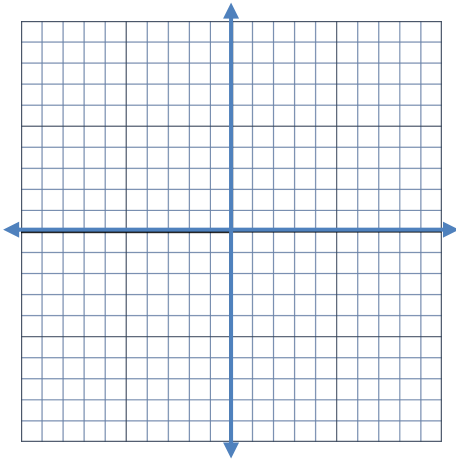
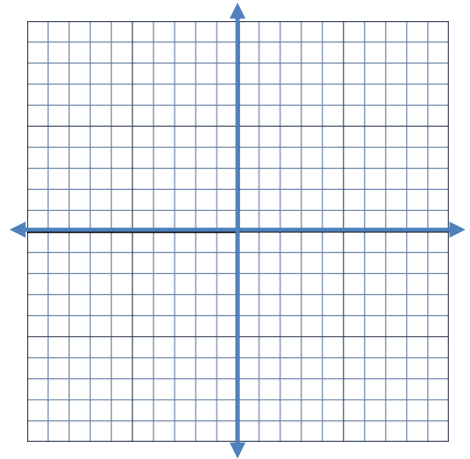


$$y = 2x + 1$$



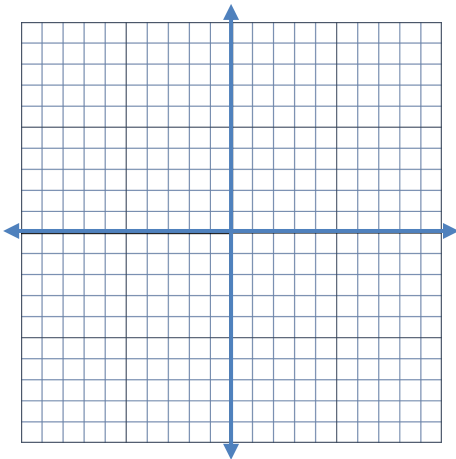
x	-3	-2	-1	0	1	2	3
y							

$$y = 3x - 1$$



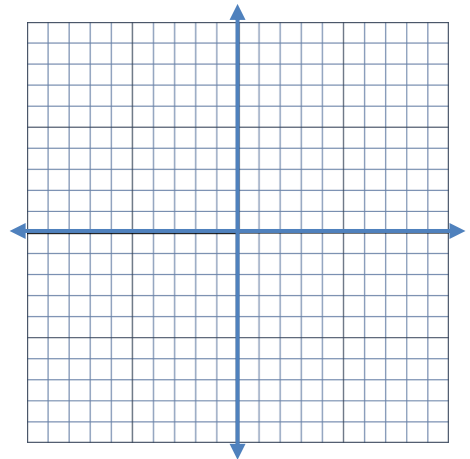
x	-3	-2	-1	0	1	2	3
y							

$$y = x + 5$$



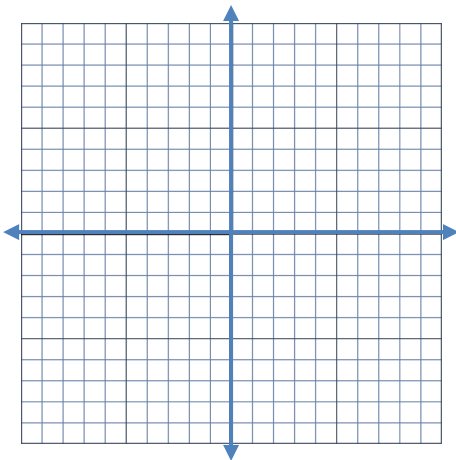
x	-3	-2	-1	0	1	2	3
y							

$$y = 2x - 5$$



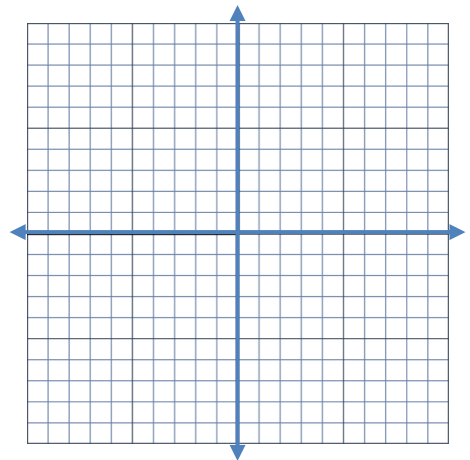
x	-3	-2	-1	0	1	2	3
y							

$$y = x - 3$$



x	-3	-2	-1	0	1	2	3
y							

$$y = 4x + 7$$



x	-3	-2	-1	0	1	2	3
y							